

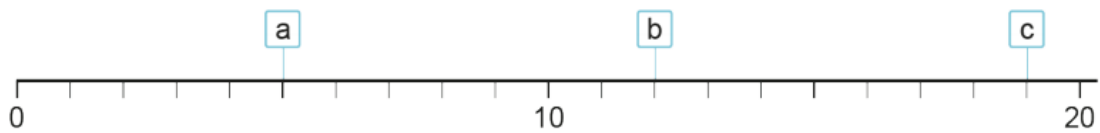
Year 1 Maths Challenge

Fill in the missing numbers.

	8	9		11	12
--	---	---	--	----	----

37	38		40		42	43
----	----	--	----	--	----	----

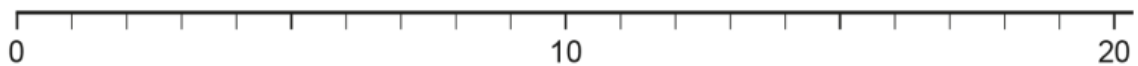
63	62		60		58	57
----	----	--	----	--	----	----



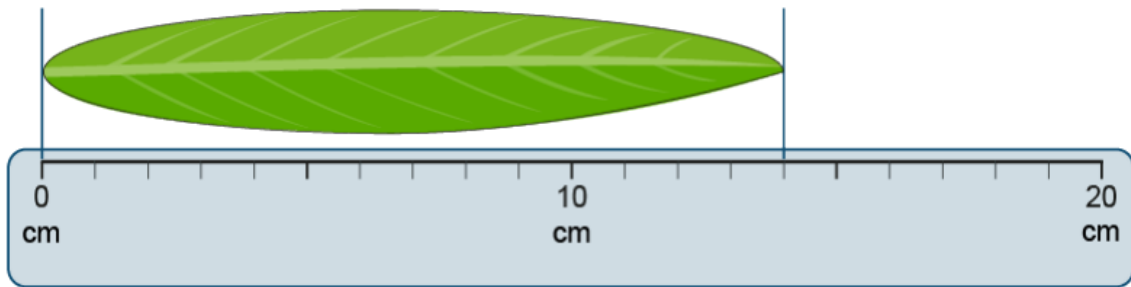
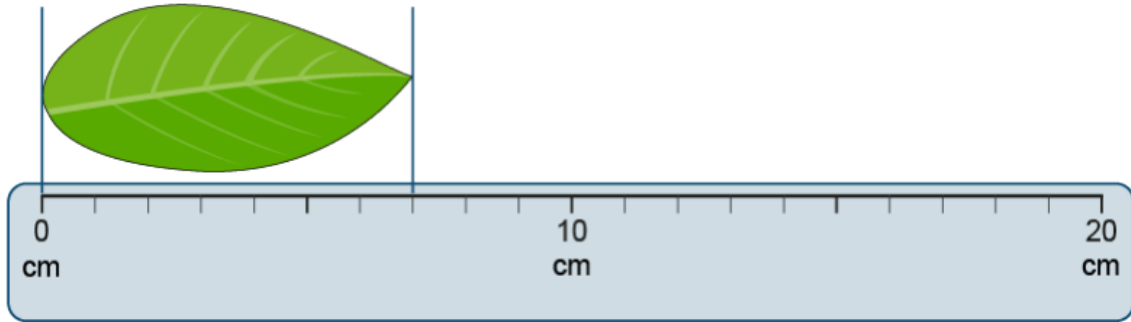
a = b = c =

Label these numbers on the number line.


9 15 3 12



Mia measures 2 different leaves with a ruler. How long is each leaf?




How many pencils are there?



How many wheels are there altogether? Count in groups of 2.




There are 5 hedgehogs in each group. How many hedgehogs are there altogether?



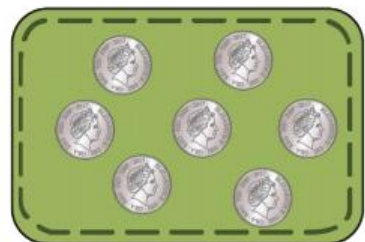
How much money is in each purse?



2p coins




10p coins



5p coins

Which equation matches the picture? Can you explain your choice?



$3 + 3 = 6$

$8 = 4 + 3$

$4 = 3 + 1$

$4 + 3 = 7$

$5 + 2 = \square$

$6 + 4 = \square$

$\square = 1 + 8$

$\square = 3 + 4$

$5 + \square = 8$

$\square + 1 = 7$

$6 = \square + 2$

$10 = 5 + \square$

$8 - 7 = \square$

$7 - 2 = \square$

$6 - 3 = \square$

$\square = 9 - 5$

$\square - 3 = 4$

$9 - \square = 7$

$3 = \square - 5$

$2 = 10 - \square$